

CSE 373 Spring 2001: Sample Final Exam

(closed book, closed notes)

Wednesday, June 6, 2:30-4:20 p.m. in BAG 260

Total: 100 points, 10 questions. Time: 110 minutes (almost 2 hours!)

Instructions:

1. Use the blank sheets provided to write down your answers. Write your name and student ID on each sheet. You may use both sides of a sheet. It is okay if you do more than one problem on one sheet. Return all sheets after you are finished.
2. Read all questions carefully before answering them. Feel free to come to the front to ask for clarifications.
3. *Hint 1:* You may answer the questions in any order, so if you find that you're having trouble with one of them, move on to another one that seems easier.
4. *Hint 2:* If you don't know the answer to a question, don't omit it - do the best you can! You may still get partial credit for whatever you wrote down. Good luck!

1. **Big Oh and Theta** (a and b: 5 and 5 points)

a. Which of the following statements is/are true:

- i. $N^2 + N \log N$ is $\Theta(N^2)$
- ii. $N^2 - 17$ is $\Omega(N^2)$
- iii. $15N + \log N$ is $O(\log N)$
- iv. 2^N is $o(N^{100})$

b. What is the running time $T(N)$ of the following code fragment in Θ notation as a function of N ? Explain your answer.

```
int result = 0;
int i = N;
while (i >= 1)
{
    result++;
    i = i / 2;
}
```

2. **Recurrence Relations and Run Time Analysis** (a and b: 4 and 6 points)

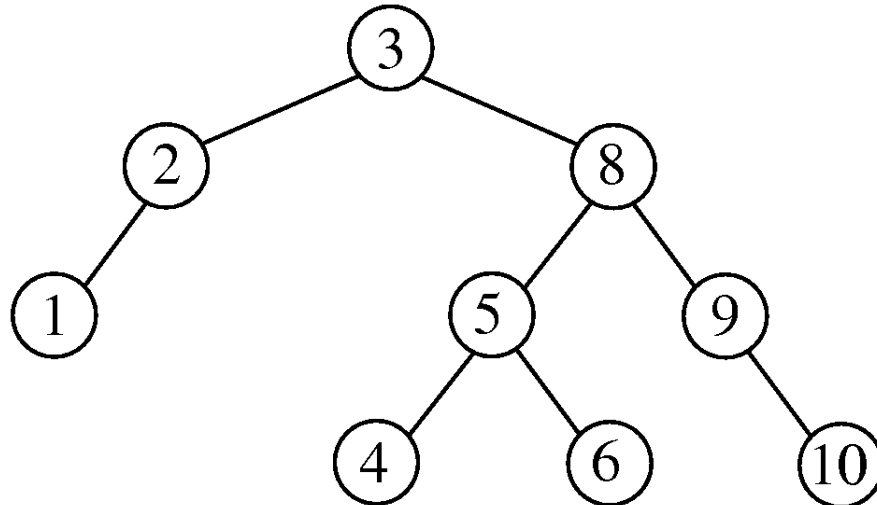
Consider the following recursive function:

```
int Lessby3(int N) {
    if (N < 3) return 3;
    else return Lessby3(N-3) * Lessby3(N-3);
}
```

- a. Suppose $T(N)$ is the running time of the above function for input N . Write down the recurrence relation for $T(N)$.
- b. Solve your recurrence relation in (a) to get an expression for $T(N)$. What is the running time $T(N)$ in Θ notation?

3. **AVL and Splay Trees** (a and b: 5 and 5 points)

The following two questions are based on the following tree:



- a. Suppose the above tree is an AVL tree. Draw the AVL tree that results from inserting 7 followed by 11 into the above AVL tree.
- b. Suppose the above tree is a splay tree. Draw the tree that results from inserting 7 followed by 11 into the above splay tree.

4. **Priority Queues** (a, b, and c: 3, 2, and 5 points)

- a. Draw the binary heap (a min-heap) that results from inserting the sequence of integers 10, 12, 1, 14, 6, 5 into an initially empty binary heap.
- b. Recall that the binomial tree of height k is formed by combining two binomial trees of height $k-1$, with height zero represented by a one-node tree. A binomial queue contains some combination of binomial trees. How many binomial trees can there be in a binomial queue with N nodes?
- c. Let Q_1 be the binomial queue that results from inserting the integers 12, 21, 24, 65, 14, 26, 16, 18, 23, 51, 24, 65, 13 (in that order) into an empty binomial queue. Let Q_2 be the binomial queue that results from inserting the integers 2, 11, 29, 55, 15, 18, 4 (in that order) into an empty binomial queue. Draw the result of merging queues Q_1 and Q_2 .

5. **Hashing** (a, b, and c: 4, 4, 2 points)
 Consider the hash function $\text{Hash}(X) = X \bmod 9$ and the ordered input sequence of keys 51, 23, 73, 99, 44, 79, 89, 38. Draw the result of inserting these keys in that order into a hash table of size 9 (cells indexed by 0, 1, ..., 8) for the following two collision resolution strategies:
- open addressing with linear probing, where $F(i) = i$
 - open addressing with double hashing, where $\text{hash}_2(X) = 7 - (X \bmod 7)$ and $F(i) = i \cdot \text{hash}_2(X)$
 - What is the load factor of the hash tables in (a) and (b)?
6. **Simple Sorts and Heapsort** (a, b, and c: 4, 2, and 4 points)
- Sort the array 34, 8, 64, 51, 32, 21 using Insertion Sort. Write your answer in the form of a table showing the array after each pass.
 - What is the running time of insertion sort for input size N if
 - the input is already sorted?
 - the input is in reverse order?
 Choose the best upper bound from: $O(\log N)$, $O(N)$, $O(N \log N)$, and $O(N^2)$
 - Sort the sequence 7, 3, 1, 5, 4 using Heapsort. First show the result of BuildHeap and then the result after each DeleteMax. Draw both the tree-structured heap and the input array
7. **Mergesort and Quicksort** (a and b: 6 and 4 points)
- Sort the sequence 3, 1, 4, 1, 5, 9, 2, 6 using Mergesort. Show the sequence of elements after each of the recursive “divide-in-half” steps as well as the result of each of the merge steps.
 - Which of the following statements is/are true (write down all that you think are true – use the standard implementation of Mergesort and Quicksort as discussed in class and in the textbook):
 - Mergesort is an “in-place” sorting algorithm
 - Quicksort has $O(N^2)$ worst case running time
 - Mergesort and Quicksort both have $O(N \log N)$ worst running time
 - Quicksort is an “in-place” sorting algorithm
 - Quicksort is a “stable” sorting algorithm
8. **Union-Find** (a and b: 5 and 5 points)
 Consider the set of initially unrelated elements 0, 1, 2, 3, 4, 5, 6, 7, 8.
- Recall the union-by-size operation. Draw the final forest of up-trees that results from the following sequence of operations based on union-by-size: Union(1,2), Union(3,1), Union(4,7), Union(5,6), Union(4,5), Union(1,4)
 - Recall what path compression does. Draw the new forest of up-trees that results from doing a Find(2) with path compression, followed by a Find(3) with path compression on your forest of up-trees from (a).

9. **Shortest Path and MST** (a and b: 6 and 4 points)

You can fill in this page and submit it with your other answer sheets

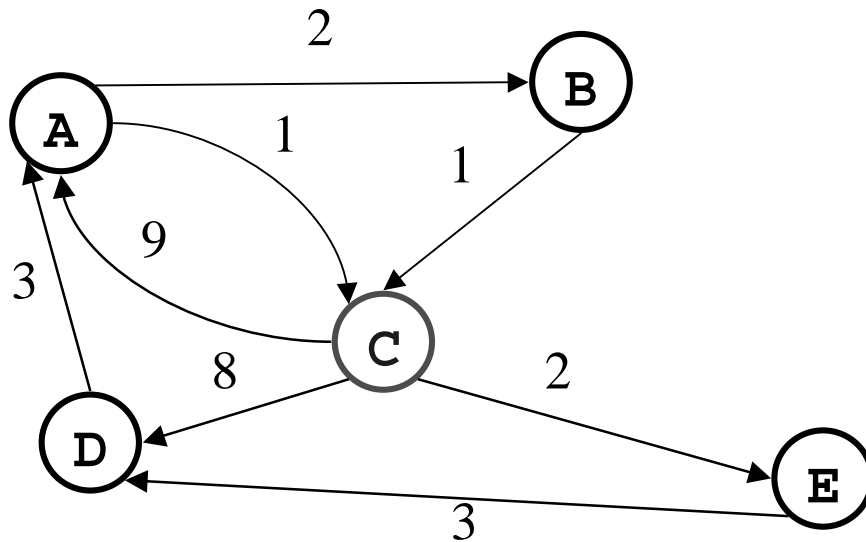
- a. Fill in the following tables using Dijkstra's algorithm for single-source shortest path for the given directed graph, with source = C:

Initial Table

Vertex v	known	Cost d_v	Prev p_v
A			
B			
C			
D			
E			

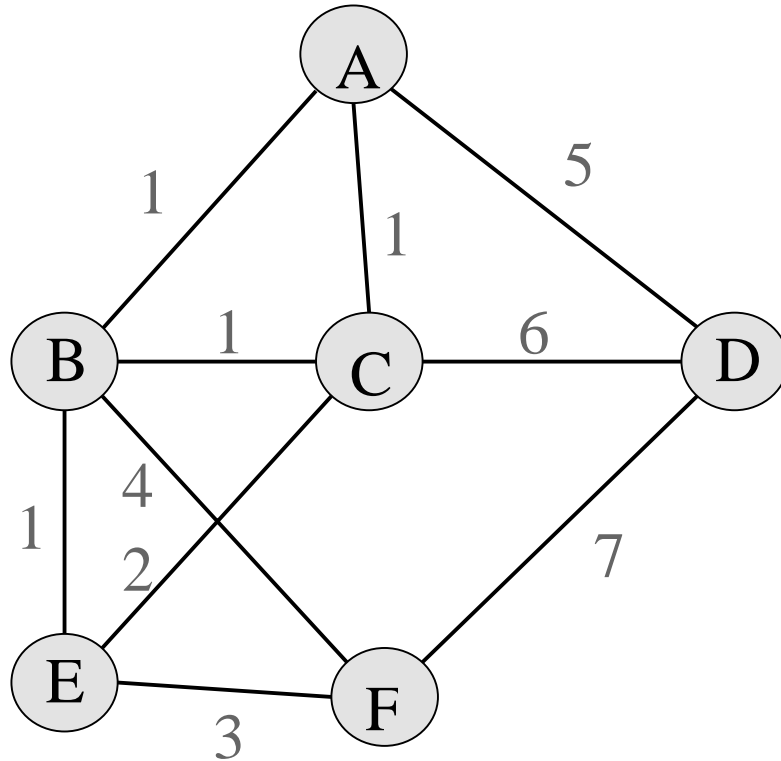
Final Table

Vertex v	known	Cost d_v	Prev p_v
A			
B			
C			
D			
E			



9. **Shortest Path and MST (continued)** (a and b: 6 and 4 points)

- a. Let T be an initially empty tree that will hold the edges in a minimal spanning tree. Write down the sequence of edges (u,v) that are added to T by Kruskal's algorithm for finding the minimum spanning tree for the following weighted graph:



10. **NP-completeness and TBD** (a and b: 4 and 6 points)

- a. Dr. G. Nyess has just announced an algorithm for the Hamiltonian circuit problem that runs in time $O(N^9 \log N)$. Assuming Dr. Nyess' claim is true, which of the following statements is/are true (write down all that you think are true):
- The Hamiltonian circuit problem is no longer in NP
 - The Hamiltonian circuit problem is now in P
 - The Hamiltonian circuit problem is no longer NP-complete
 - $P = NP$
 - $P \neq NP$
- b. To be disclosed (in the final) – this will test your problem solving skills with a new problem. All you will need to solve it are the skills you have learned in this class.