

# CSE 369 QUIZ 3

Name: \_\_\_\_\_

Student ID  
Number: \_\_\_\_\_

**Please do not turn the page until 11:40.**

## Instructions

- This quiz contains 4 pages, including this cover page.
- Show scratch work for partial credit, but put your final answers in the boxes and blanks provided.
- The quiz is closed book and closed notes.
- Please silence and put away all cell phones and other mobile or noise-making devices.
- Remove all hats, headphones, and watches.
- You have 60 (+10) minutes to complete this quiz.

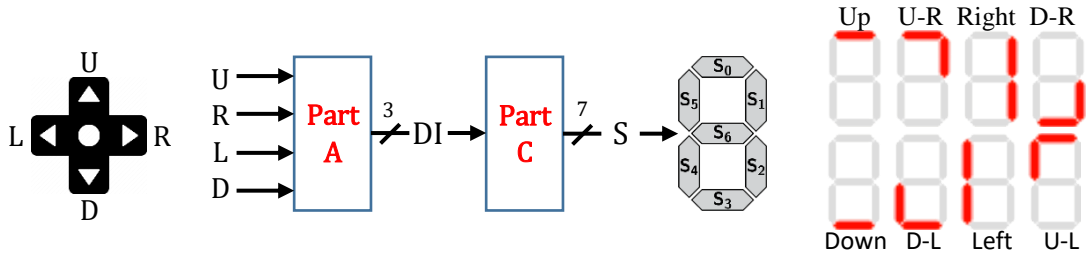
## Advice

- Read questions carefully before starting. Read *all* questions first and start where you feel the most confident to maximize the use of your time.
- There may be partial credit for incomplete answers; please show your work.
- Relax. You are here to learn.

Question	Points	Score
(1) Decoders	13	
(2) Routing Elements	10	
(3) Shift Registers	10	
<b>Total:</b>	<b>33</b>	

**Question 1: Decoders [13 pts]**

We are building a **7-seg decoder circuit** for a **directional pad** (D-pad), which has a push-button (1 when pushed) for each of the 4 cardinal directions: U(p), R(ight), L(eft), and D(own). There is a physical restriction that at most two neighboring buttons can be pressed simultaneously (e.g.,  $U\bar{R}\bar{L}\bar{D}$  is possible but not  $\bar{U}R\bar{L}\bar{D}$  or  $U\bar{R}L\bar{D}$ ), leading to 8 possible indicated directions on the 3-bit bus DI, numbered clockwise from Up = 0b000 to Up-Right = 0b001 around to Up-Left = 0b111.



(A) Complete the truth table. [4 pt]

(B) In the space below, solve for the minimal logical expression for  $DI_2$ . [4 pt]

U	R	L	D	$DI_2$	$DI_1$	$DI_0$
0	0	0	0	X		
0	0	0	1	1		
0	0	1	0	1		
0	0	1	1	1		
0	1	0	0	0		
0	1	0	1	0		
0	1	1	0	X		
0	1	1	1	X		
1	0	0	0	0		
1	0	0	1	X		
1	0	1	0	1		
1	0	1	1	X		
1	1	0	0	0		
1	1	0	1	X		
1	1	1	0	X		
1	1	1	1	X		

(C) For the 7-seg signal numbering and outputs shown above (lit/red = 1), draw the minimal logic for  $S_4$  in terms of  $DI_2$ ,  $DI_1$ , and  $DI_0$ . [3 pt]

$DI_2$

$DI_1$

$DI_0$

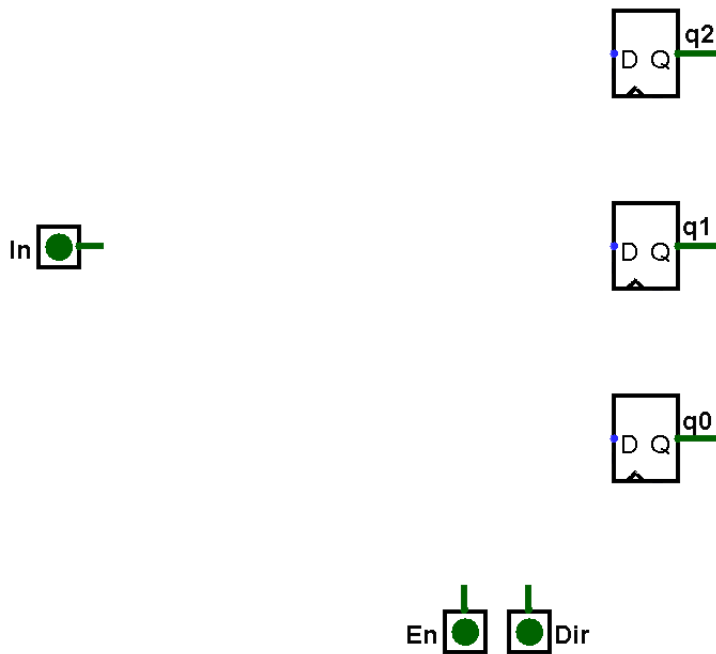
$S_4$

(D) Briefly describe what's problematic about this D-pad decoder circuit. [2 pts]

## Question 2: Routing Elements [10 pts]

We are creating an *enabled* 3-bit bidirectional shifter (can shift in both directions), which takes input bits **En** (short for Enable), **Dir**, and **In**. When enabled, we shift the current bits either to the right (*i.e.*, into the less significant bit) when **Dir** = 1 or to the left when **Dir** = 0 and shift in **In**. When not enabled, the state bits remain the same.

- (A) Draw the circuit diagram below using *logic gates* and *routing elements* discussed in class. Assume the clock inputs are connected properly for you. You may use multiple copies of a signal name (*e.g.*, q2, q1, q0), which are assumed connected to the same net/wire. [5 pt]



- (B) In the Verilog test bench below, fill in the blanks to indicate how the state of our bidirectional shifter updates. [5 pts]

```

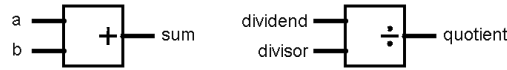
initial begin                                     // state: q2q1q0
    En <= 0; Dir <= 0; In <= 0;                     // state: 010
    @(posedge clk); En <= 1;                        // state: _____
    @(posedge clk); {Dir, In} <= 2'd3;             // state: _____
    @(posedge clk); In <= 0;                        // state: _____
    @(posedge clk); En <= 0;                        // state: _____
    @(posedge clk); $stop();                        // state: _____
end

```

**Question 3: Shift Registers [10 pts]**

A **boxcar** (or moving average) **filter** computes the average of the last  $k$  samples and can be used to smooth out sudden input spikes (*i.e.*, it's a low-pass filter).

- (A) Draw a circuit below that computes the moving average of the last 3 inputs, *i.e.*,  $k = 3$  and  $y_i = (x_i + x_{i-1} + x_{i-2}) / 3$ , for a signal  $x$ , where  $x_{i-1}$  is the value of  $x_i$  from the previous clock cycle and so on. The given register is there for synchronization; you should *not* connect anything directly to Input. You can use registers, constants, and any number of the following logic blocks: [6 pts]



- (B) The time delay portion of the boxcar filter (*i.e.*, computing  $x_i$ ,  $x_{i-1}$ , and  $x_{i-2}$ ) can be considered a shift register! Assuming 1-bit signals and using  $\{x_i, x_{i-1}, x_{i-2}\}$  as our state bits and Input as our input, complete the corresponding Moore machine: the state names correspond to the output state bits, so only the value of Input should be shown on the transition arrows. [4 pts]

