

CSE 369 QUIZ 2

Name: _____

UWNetID: _____

Please do not turn the page until 10:30.

Instructions

- This quiz contains 4 pages, including this cover page. You may use the backs of the pages for scratch work.
- Please clearly indicate (box, circle) your final answer.
- The quiz is closed book and closed notes.
- Please silence and put away all cell phones and other mobile or noise-making devices.
- Remove all hats, headphones, and watches.
- You have 25 minutes to complete this quiz.

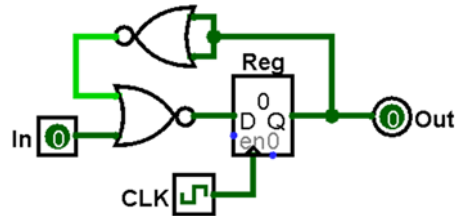
Advice

- Read questions carefully before starting. Read *all* questions first and start where you feel the most confident to maximize the use of your time.
- There may be partial credit for incomplete answers; please show your work.
- Relax. You are here to learn.

Question	Points	Score
(1) SL & Timing	7	
(2) FSM Implementation	10	
(3) FSM Design	10	
Total:	27	

Question 1: Sequential Logic & Timing [7 pts]

Consider the following circuit diagram with $t_{setup} = 60 \text{ ps}$ (10^{-12} s), $t_{hold} = 40 \text{ ps}$, $t_{C2Q} = 140 \text{ ps}$, and $t_{NOR} = 200 \text{ ps}$. Consider each part below *independently* and fill in your answers in the boxes below, making sure to *include units*.

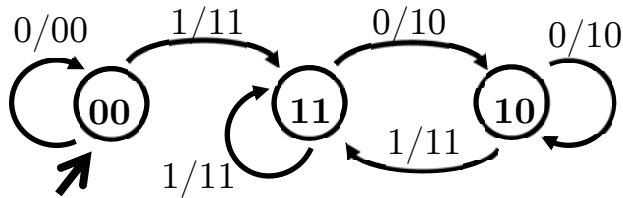


- (A) If the input In changes exactly on clock triggers, what is the minimum clock period that we can use and still ensure proper behavior? [3 pts]

- (B) If we fix the clock period at **750 ps**, what range of times (measured from each clock trigger) will changing the input In cause a *setup time violation*? Answer using inclusive interval notation: $[t_{start}, t_{end}]$. [4 pts]

Question 2: Finite State Machine Implementation [10 pts]

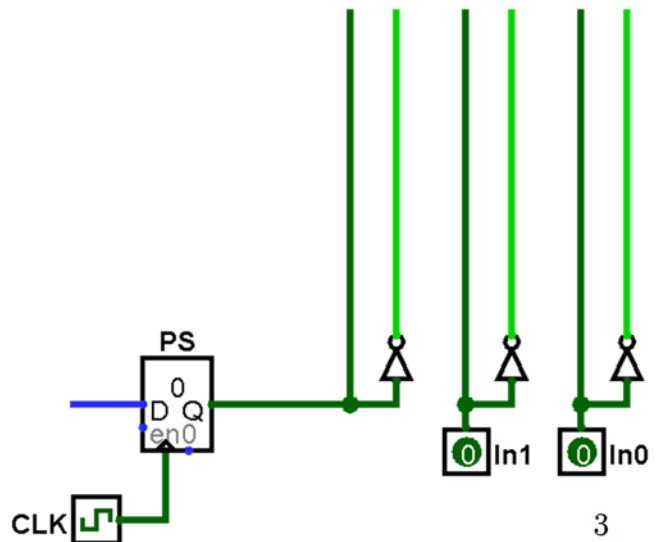
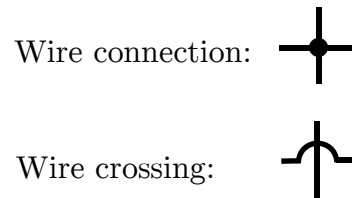
(A) Fill in the provided truth table based on the FSM shown. [2 pts]



PS ₁	PS ₀	In	NS ₁	NS ₀	Out ₁	Out ₀
0	0	0	0			0
0	0	1	1	1	1	1
0	1	0	X			X
0	1	1	X	X	X	X
1	0	0	1			0
1	0	1	1	1	1	1
1	1	0	1			0
1	1	1	1	1	1	1

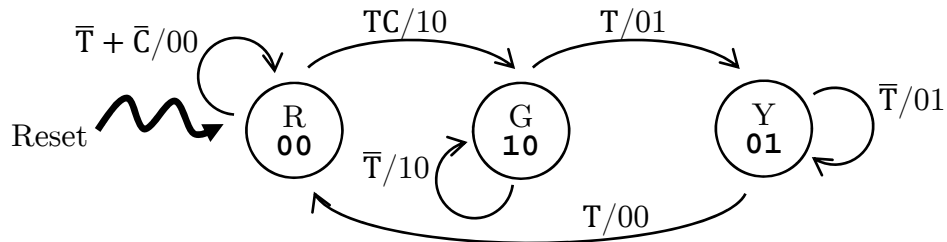
(B) Complete the circuit diagram below using *minimal logic* based on the truth table shown below. You are welcome to use 2- and 3-input logic gates. [8 pts]

PS	In ₁	In ₀	NS	Out
0	0	0	0	1
0	0	1	1	1
0	1	0	0	0
0	1	1	X	X
1	0	0	0	1
1	0	1	1	1
1	1	0	1	0
1	1	1	X	X



Question 3: Finite State Machine Design [10 pts]

The following FSM represents a stop light that is controlled by a timer (input T pulses high at regular intervals) and a sensor that signals high when a car is stopped at the intersection (input C). The light outputs the colors 00 – red, 01 – yellow, 10 – green:



- (A) How many total rows are in the truth table for this FSM? How many of the rows are filled with Don't Cares? [2 pt]

Rows:	Don't Care Rows:
-------	------------------

- (B) The testbench initial block below doesn't cover every transition! In the table on the right, write out the *four* missing state and input combinations. Don't include Don't Care situations. You are welcome to fill out the Verilog comments to help you keep track of state, but these will not be graded. [8 pts]

```

initial begin
    T <= 0; C <= 0; // state: 00
    @(posedge clk); T <= 1; C <= 0; // state: ____
    @(posedge clk); T <= 1; C <= 1; // state: ____
    @(posedge clk); T <= 0; C <= 0; // state: ____
    @(posedge clk); T <= 0; C <= 1; // state: ____
    @(posedge clk); T <= 1; C <= 1; // state: ____
    @(posedge clk); T <= 0; C <= 1; // state: ____
    @(posedge clk); T <= 1; C <= 0; // state: ____
    @(posedge clk); // state: ____
    $stop();
end
  
```

PS ₁	PS ₀	T	C