

CSE 344 Final Examination

Monday, December 10, 2018, 2:30-4:20

Name: _____

Question	Points	Score
1	30	
2	20	
3	20	
4	30	
5	20	
6	35	
7	45	
Total:	200	

- This exam is CLOSED book and CLOSED devices.
- You are allowed TWO, HAND-WRITTEN letter-size sheets with notes (both sides).
- You have 110 minutes;
- Answer the easy questions before you spend too much time on the more difficult ones.
- Good luck!

1 Relational Data Model

1. (30 points)

You are now a Climate Scientist, and run simulations to predict future changes in the climate. Your job is to improve the simulator in order to improve the climate predictions. Every time you have a new version of the simulator, you run it, and it will generate a dataset where, for each year, it records the predicted temperature at each location of your simulated area. You analyze the results, improve the simulator, and repeat. As a good scientist, you keep the results of all simulations in a relation with the following schema:

`Sim(version, year, loc, temp)`

The data types of `Version` and `year` are integers; `temp` is a real number; and `loc` is a text.

- (a) (5 points) Write a SQL `CREATE TABLE` statement to create the `Sim` relation. Identify the key in `Sim`, and create the key in your SQL statement. Choose `float` and for the real number type and `text` for the text type.

`Sim(version, year, loc, temp)`

- (b) (5 points) Simulation version 13 is wrong, due to a bug in the simulator. Write a SQL query to delete version 13 from your dataset.

`Sim(version, year, loc, temp)`

- (c) (10 points) Write a SQL query that returns all locations where the temperature has increased in every year of the simulation with version number 23.

`Sim(version, year, loc, temp)`

- (d) (10 points) Now you are comparing versions 22 and 23. Write a SQL query that lists all years where the maximum temperature (at all locations) in version 22 was lower than the minimum temperature in the same year in version 23.

2 Datalog

2. (20 points)

A social network site has a database with its users and blogs that they post:

```
User(uid, name, email)
Blog(bid, author, text)
Follows(uid1, uid2)
```

Here `Blog.author`, `Follows.uid1` and `Follows.uid2` are foreign keys to `User`. A record in `Follows` means that the user with `uid1` follows the user with `uid2`.

On this social network a user can only see her own blogs, and all the blogs seen by all the users she follows. For example if Alice follows Bob and Bob follows Carol, then Alice can read her blogs, Bob's blogs, and Carol's blogs, while Bob can read his blogs and Carol's blogs.

- (a) (10 points) The blog with `bid = 359` contains misleading information. The site administrator wants to contact all users who can see this blog. Write a datalog program to find all users who the site owner needs to contact. Your program should return a set of `uid`, `name`, `email` tuples.

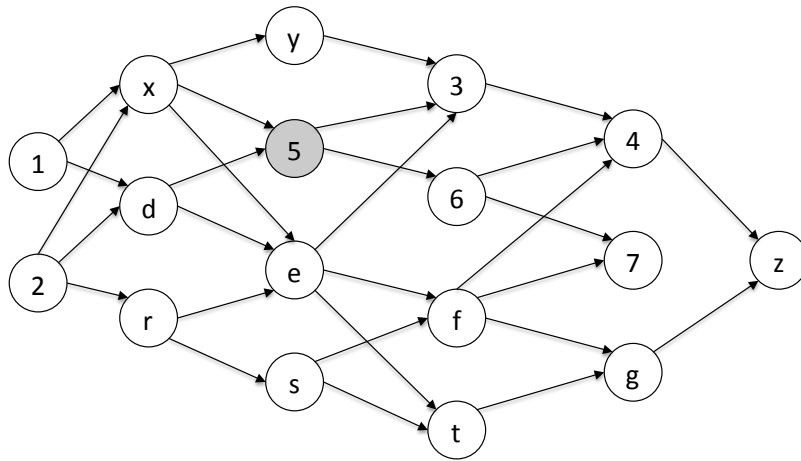
(b) (10 points) Consider the datalog program below:

$$T(x, y) \text{ :- } R(x, z), R(y, z)$$

$$T(x, y) \text{ :- } T(x, z), T(z, y)$$

$$Q(w) \text{ :- } T(5, w)$$

Show the output of the IDB predicate Q when the program is run on the relation R given by the graph below; for example, the edge $2 \rightarrow d$ denotes the tuple $(2, d) \in R$. You do not need to justify your answer.



3 NoSQL, JSON, SQL++

3. (20 points)

(a) (10 points) We are given a JSON file with noble prize laureates, with the following structure:

```
{
  "prizes": [
    {
      "year": "2018",
      "category": "physics",
      "overallMotivation": "For groundbreaking inventions in the field of laser physics",
      "laureates": [
        {
          "id": "960",
          "name": "Arthur Ashkin",
          "motivation": "\"for the optical tweezers and their application to biological systems\"",
          "share": "2"
        },
        {
          "id": "961",
          "name": "Grard Mourou",
          "motivation": "\"for their method of generating high-intensity, ultra-short optical pulses\"",
          "share": "4"
        },
        {
          "id": "962",
          "name": "Donna Strickland",
          "motivation": "\"for their method of generating high-intensity, ultra-short optical pulses\"",
          "share": "4"
        }
      ]
    },
    {
      "year": "2018",
      "category": "chemistry",
      ...
    },
    {
      "year": "2018",
      "category": "medicine",
      ...
    }
  ]
}
```

Write a SQL++ query that returns each noble prize laureate who has received more than one award, along with a list of the years and categories that each such laureate has received. Your query should return a JSON file with a structure like the following:

```
{
  "name": "Frederick Sanger",
  "awards": [ { "year": "1958", "category": "chemistry" },
              { "year": "1980", "category": "chemistry" } ]
}
{
  "name": "Marie Curie, ne Sklodowska",
  "awards": [ { "year": "1903", "category": "physics" },
              { "year": "1911", "category": "chemistry" } ]
}
...
```


[this page is intentionally left blank]

(b) For each statement below indicate if it is true or false.

i. (2 points) JSON is in First Normal Form.

True or false?

i. _____

ii. (2 points) JSON represents semistructured data.

True or false?

ii. _____

iii. (2 points) It is easy to represent a many-to-one relationship in JSON, but it is difficult to represent a many-to-many relationship.

True or false?

iii. _____

iv. (2 points) SQL++ can express all queries expressible in datalog.

True or false?

iv. _____

v. (2 points) ACID transactions today are increasingly using JSON data as opposed to relational data.

True or false?

v. _____

`Sim(version, year, loc, temp)`

4 Query Execution and Optimization

4. (30 points)

(a) (10 points) Write a logical plan for the following query.

```
select x.year, x.loc, x.temp
from Sim x
where x.version = 22
and x.temp > (select avg(y.temp)
              from sim y
              where y.version = 23
              and x.loc = y.loc);
```

You should turn in a relational algebra tree.

- (b) In this question we consider three relations $R(A, B)$, $S(B, C)$, $T(C, D)$ and the following statistics:

$$\begin{aligned}T(R) &= 10^5 & B(R) &= 100 \\T(S) &= 6 \cdot 10^6 & B(S) &= 3000 \\T(T) &= 5 \cdot 10^4 & B(T) &= 40000 \\V(R, A) &= 5 \cdot 10^4 \\V(R, B) &= V(S, B) = 3 \cdot 10^3 \\V(S, C) &= V(T, C) = 2 \cdot 10^4 \\V(T, D) &= 10^4\end{aligned}$$

- i. (5 points) Estimate the number of tuples returned by $\sigma_{A=2432}(R)$. You should turn in an integer number.

- ii. (5 points) Estimate number of tuples returned by the following query:

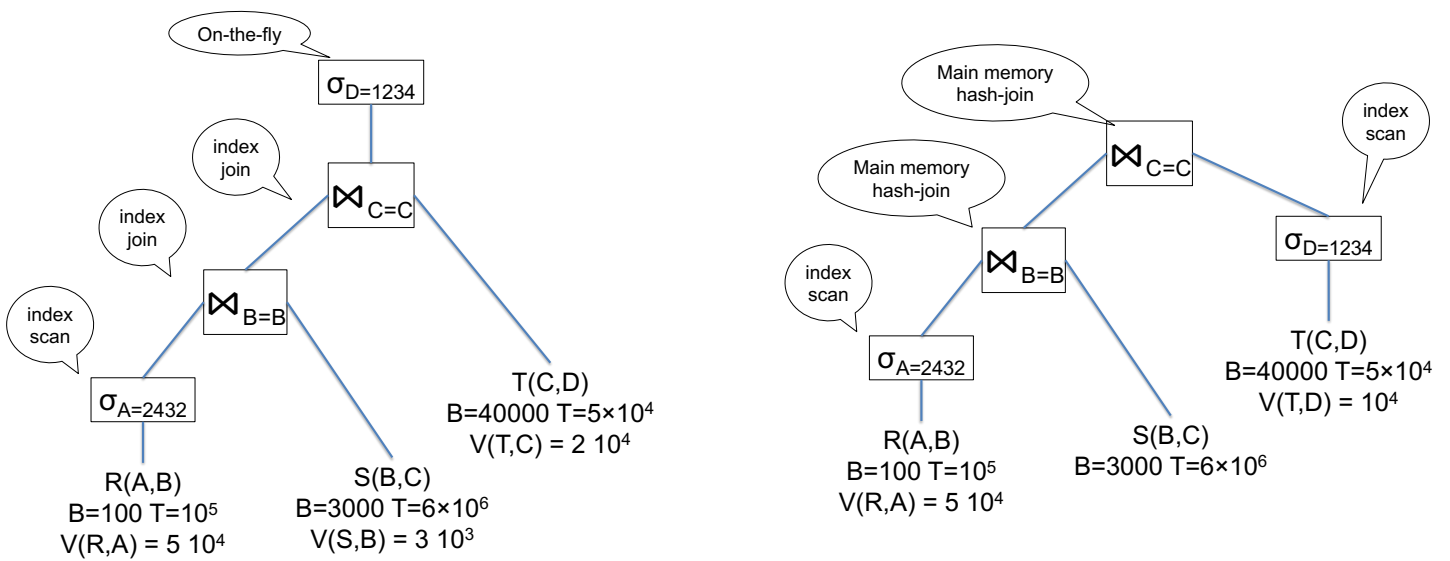
```
SELECT *
FROM R, S, T
WHERE R.A = 2432 and R.B = S.B and S.C = T.C and T.D = 1234
```

You should turn in an integer number.

iii. (10 points) Assume the following indices:

- Unclustered indexes on $R.A$ and $R.B$
- Clustered index in $S.B$, unclustered index on $S.C$.
- Clustered index on $T.C$, unclustered index on $T.D$.

Estimate the I/O cost for two the physical plans below. Use the same statistics as in the previous question (they are shown on the plans, for your convenience).



5 Parallel Query Processing

5. (20 points)

Consider a relation with the following schema and statistics:

`Users(uid,firstName,lastName)`

$T(\text{Users}) = 10,000,000$

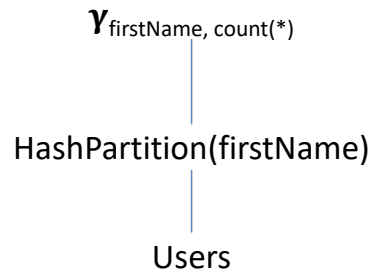
$V(\text{Users}, \text{firstName}) = 100,000$

The query below counts the number of users that have the same first name:

```
select firstName, count(*)  
from Users  
group by firstName
```

The data is initially block partitioned on 1000 servers, so that each server holds 10000 records; we assume that the records are randomly distributed to the 1000 servers,

- (a) The query optimizer chooses to compute the query using the following plan:



In words, the data is first reshuffled among the 1000 servers using by hash partitioning on `firstName`, then each server computes a group-by locally.

Answer the questions below:

- i. (2 points) The most popular first name is Mary. Suppose there are 410 users called Mary. In expectation, what is the maximum number of records received by any server during reshuffling? Choose the closest:
- (a) 1
 - (b) 100
 - (c) 410
 - (d) 10000
 - (e) 410000
 - (f) 10M

i. _____

Choose from (a)-(f)

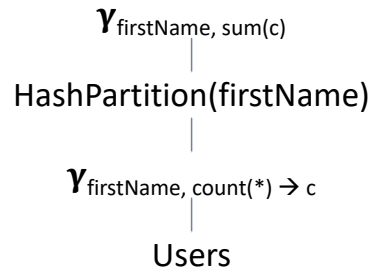
- ii. (2 points) The most popular first name is Mary. Suppose there are 140000 users called Mary. In expectation, what is the maximum number of records received by any server? Choose the closest:
- (a) 1
 - (b) 100
 - (c) 140
 - (d) 10000
 - (e) 140000
 - (f) 10M

ii. _____

Choose from (a)-(f)

`Users(uid, firstName, lastName)`

(b) Now the query optimizer chooses to compute the query using the following plan:



Answer the questions below:

- i. (2 points) The most popular first name (Mary) occurs 410 times. In expectation, what is the maximum number of records received by any server? Choose the closest:
- (a) 1
 - (b) 100
 - (c) 410
 - (d) 10000
 - (e) 410000
 - (f) 10M

i. _____

Choose from (a)-(f)

- ii. (2 points) The most popular first name (Mary) occurs 140000 times. In expectation, what is the maximum number of records received by any server? Choose the closest:
- (a) 1
 - (b) 100
 - (c) 140
 - (d) 10000
 - (e) 140000
 - (f) 10M

ii. _____

Choose from (a)-(f)

(c) For each statement below indicate if it is true or false.

- i. (2 points) For any query Q , if you can compute Q on a single server in one hour, then you can compute it in parallel on 60 servers in 1 minute.

i. _____

True or false?

- ii. (2 points) For any query Q , if you can compute Q in parallel on 60 servers in 1 minute, then you can compute it on a single server in one hour.

ii. _____

True or false?

- iii. (2 points) Spark improved over MapReduce by introducing the idea of distributing the data over many servers.

iii. _____

True or false?

- iv. (2 points) Spark improved over MapReduce by introducing the idea of allowing recovery from failure without having to store all intermediate results on disk.

iv. _____

True or false?

- v. (2 points) Consider the function in Spark $\text{map}(f) : \text{RDD} \langle T \rangle \rightarrow \text{RDD} \langle U \rangle$, where $f : T \rightarrow U$. The output RDD can never have a strictly smaller cardinality (number of tuples) than that of the input RDD.

v. _____

True or false?

- vi. (2 points) Consider the function $\text{flatMap}(f) : \text{RDD} \langle T \rangle \rightarrow \text{RDD} \langle U \rangle$, where $f : T \rightarrow \text{Seq}(U)$. The output RDD can never have a strictly smaller cardinality than that of the input RDD. (Recall: $\text{Seq}(T)$ means *sequence of T* , or *array of T* .)

vi. _____

True or false?

6 Conceptual Design

6. (35 points)

(a) (5 points) Consider the following table:

<i>A</i>	<i>B</i>	<i>C</i>	<i>D</i>	<i>E</i>
0	0	0	0	0
1	1	1	1	1
2	2	2	2	0
3	3	3	0	1
4	4	0	1	0
5	5	1	2	1
6	0	2	0	0
7	1	3	1	1
8	2	0	2	0
9	3	1	0	1
10	4	2	1	0
11	5	3	2	1
12	0	0	0	0

Find all functional dependencies that hold on this table. You only need to write a minimal set of functional dependencies that logically imply all others. Hint: notice that $B = A \pmod 6$ etc; you should be able to find the FD's very fast.

(b) (5 points) Using the functional dependencies you have identified at the previous question, decompose the relation in BCNF. You only need to show your final result: the relation names, their attributes, and their keys (underline the key attributes).

- (c) (5 points) The relation $R(A, B, C, D, E)$ satisfies the following functional dependencies:

$$AD \rightarrow E$$

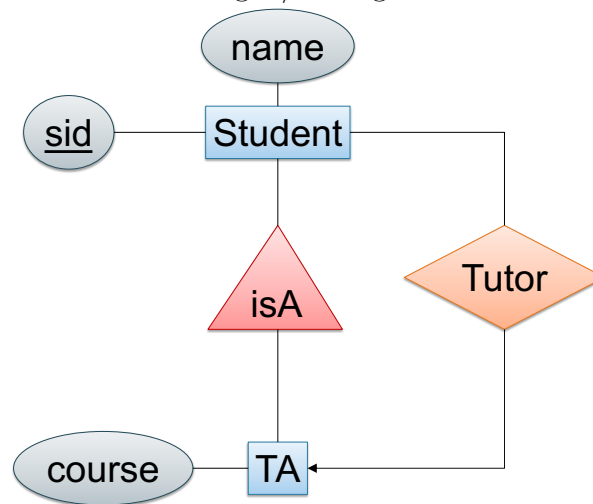
$$CD \rightarrow A$$

Consider the relation returned by the following query:

```
select distinct R.B, R.D, R.E, 'foo' as F
from R
where R.C = 'bar'
```

Find the key in the resulting table.

(d) (5 points) Consider the following E/R diagram:



Every student has an ID and a name. Some students are TA's for a course. Every student has at most one Tutor, who is one of the TA's. Write the CREATE TABLE statements to implement the E/R diagram in SQL. Your statements should contain all key and foreign key declarations. Assume that `sid` and `course` are integers, and `name` is a text.

(e) For each statement below indicate whether it is true or false.

i. (3 points) A superkey is any set of attributes X such that $X = X^+$.

i. _____

True or false?

ii. (3 points) For any set of attributes X , the set X^+ is a superkey.

ii. _____

True or false?

iii. (3 points) For any set of attributes X , the following identity holds: $(X^+)^+ = X^+$.

iii. _____

True or false?

iv. (3 points) If $X \cap Y$ is a superkey, then X is also a superkey.

iv. _____

True or false?

v. (3 points) If $X \cup Y$ is a superkey, then X is also a superkey.

v. _____

True or false?

7 Transactions

7. (45 points)

(a) A database consists of the following elements:

$$A_1, \dots, A_{1000}$$

The system runs a workload of transactions of the following kind:

```
BEGIN
READ( $A_i$ )
/* ... compute... compute... compute ... for 0.1 seconds */
WRITE( $A_i$ )
COMMIT
```

Each transaction reads one element A_i , performs some intensive computation, then writes the same element back. Different transactions may access the same element or different elements.

The system is shared-memory, has 100 CPUs, and uses inter-query parallelism (multiple transactions are run in parallel, but each transaction runs on a single CPU). For serializability, the system uses one lock per element (like SQL Server).¹

How many transactions per second can the system execute in each case below?

i. (5 points) All transactions access the same element A_1 . That is, the transactions update elements in this sequence: A_1, A_1, A_1, \dots

Answer Write the number of transactions per second (TPS):

ii. (5 points) The transactions update only elements from the first 50 elements. More precisely, each transaction reads/writes an element A_i chosen uniformly at random from among A_1, \dots, A_{50} . For example, the transactions may update the elements in this sequence: $A_{44}, A_2, A_{13}, A_2, A_{36}, A_{11}, \dots$

Answer Write the number of transactions per second (TPS):

iii. (5 points) The transactions update all elements. More precisely, each transaction reads/writes an element A_i , chosen uniformly at random from among A_1, \dots, A_{1000} .

Answer Write the number of transactions per second (TPS):

¹While in a real multicore system speedup is affected dramatically by latch contention, our multicore system has magic latches that do not cause any slowdown.

- (b) For each schedule below indicate whether it is conflict serializable and, if it is, indicate the equivalent serial schedule.
- i. (5 points)

$R_1(A), W_2(B), R_3(C), W_3(A), R_4(D), R_4(B), W_1(D), W_2(C)$

- ii. (5 points)

$R_1(A), W_2(B), R_3(C), W_3(A), R_1(D), R_4(B), W_4(D), W_2(C)$

(c) For each of the following statements indicate whether it is true or false:

- i. (2 points) In a static database, every serializable schedule is conflict serializable.

True or false?

i. _____

- ii. (2 points) In a dynamic database, every serializable schedule is conflict serializable.

True or false?

ii. _____

- iii. (2 points) In a static database, every conflict serializable schedule is serializable.

True or false?

iii. _____

- iv. (2 points) In a dynamic database, every conflict serializable schedule is serializable.

True or false?

iv. _____

- v. (2 points) When a deadlock occurs, then the database system aborts one or more transactions.

True or false?

v. _____

- (d) A database for course registration maintains a binary element R indicating whether the registration is open or not:

$R = 1$ means registraion is open
 $R = 0$ means registraion is closed

For historical reasons, the database has a second element Q representing the same information:

$Q = 1$ means registraion is open
 $Q = 0$ means registraion is closed

This is a big problem, because some applications update R , some applications update Q , and some update both. The administrator wrote two transactions $T1$ and $T2$ to set them to equal values:

<pre>set isolation level READ COMMITTED begin transaction -- T1 READ(R); If R=0 Then Q = 0; Else Q = 1; WRITE(Q); commit</pre>	<pre>set isolation level READ COMMITTED begin transaction -- T2 READ(Q); If Q=0 Then R = 0; Else R = 1; WRITE(R); commit</pre>
--	--

Notice that both transactions run under the READ COMMITTED isolation level. The initial values are $R = 0$ and $Q = 1$. Answer the questions below:

- i. (2 points) Is deadlock possible?

i. _____

Yes or no:

- ii. (2 points) Is the outcome $R = 0, Q = 0$ possible?

ii. _____

Yes or no:

- iii. (2 points) Is the outcome $R = 0, Q = 1$ possible?

iii. _____

Yes or no:

- iv. (2 points) Is the outcome $R = 1, Q = 0$ possible?

iv. _____

Yes or no:

- v. (2 points) Is the outcome $R = 1, Q = 1$ possible?

v. _____

Yes or no: