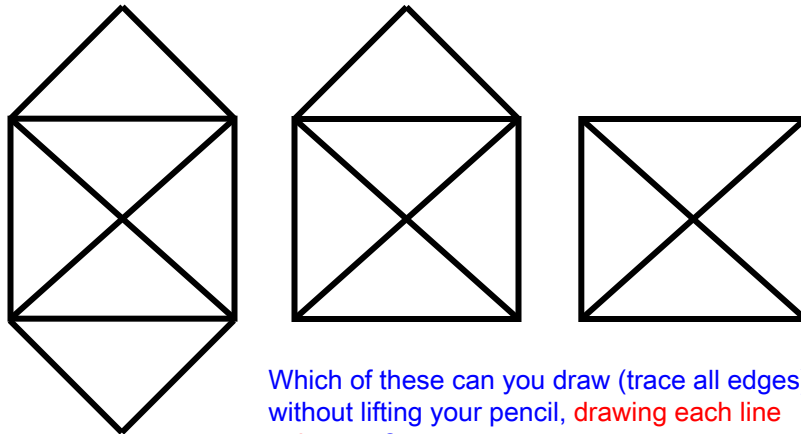


Try it



Which of these can you draw (trace all edges) without lifting your pencil, drawing each line only once?
Can you start and end at the same point?

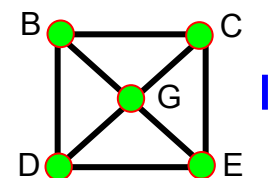
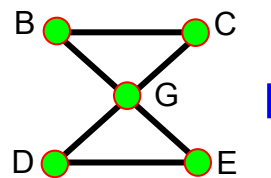
3/15/2022

5

5

Hamiltonian Circuits

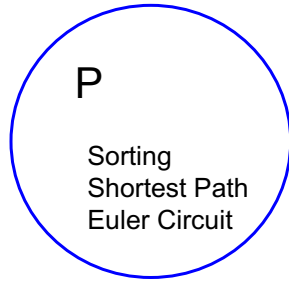
- **Euler circuit:** A cycle that goes through each *edge* exactly once
- **Hamiltonian circuit:** A cycle that goes through each *vertex* exactly once
- Does graph I have:
 - An Euler circuit?
 - A Hamiltonian circuit?
- Does graph II have:
 - An Euler circuit?
 - A Hamiltonian circuit?
- Which problem sounds harder?



3/15/2022

16

16

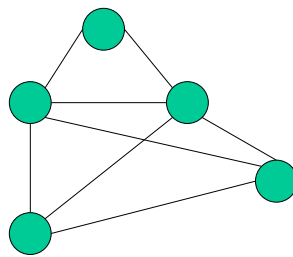


3/15/2022

25

25

Example



G

Input to Hamiltonian
Circuit Problem

3/15/2022

48

48