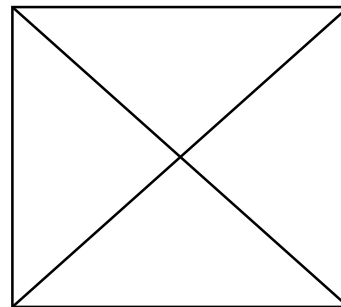
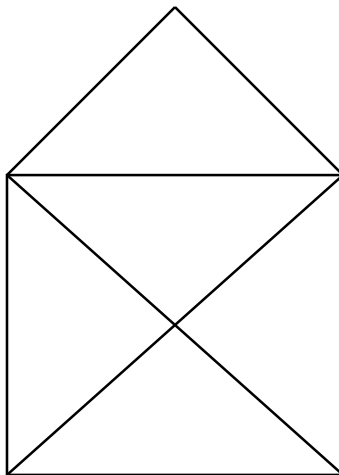
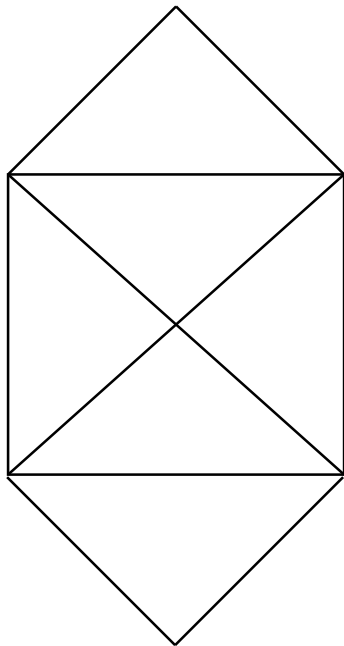


# Warm-up

- ❖ Which of these can you draw (ie, trace all edges) without lifting your pencil, *drawing each line only once*?
  - Bonus: can you start and end at the same point?



Sorting  
Shortest Path  
Euler Circuit

Hamiltonian Circuit  
Satisfiability (SAT)  
Vertex Cover  
Travelling Salesman

Tower of Hanoi