

Counting



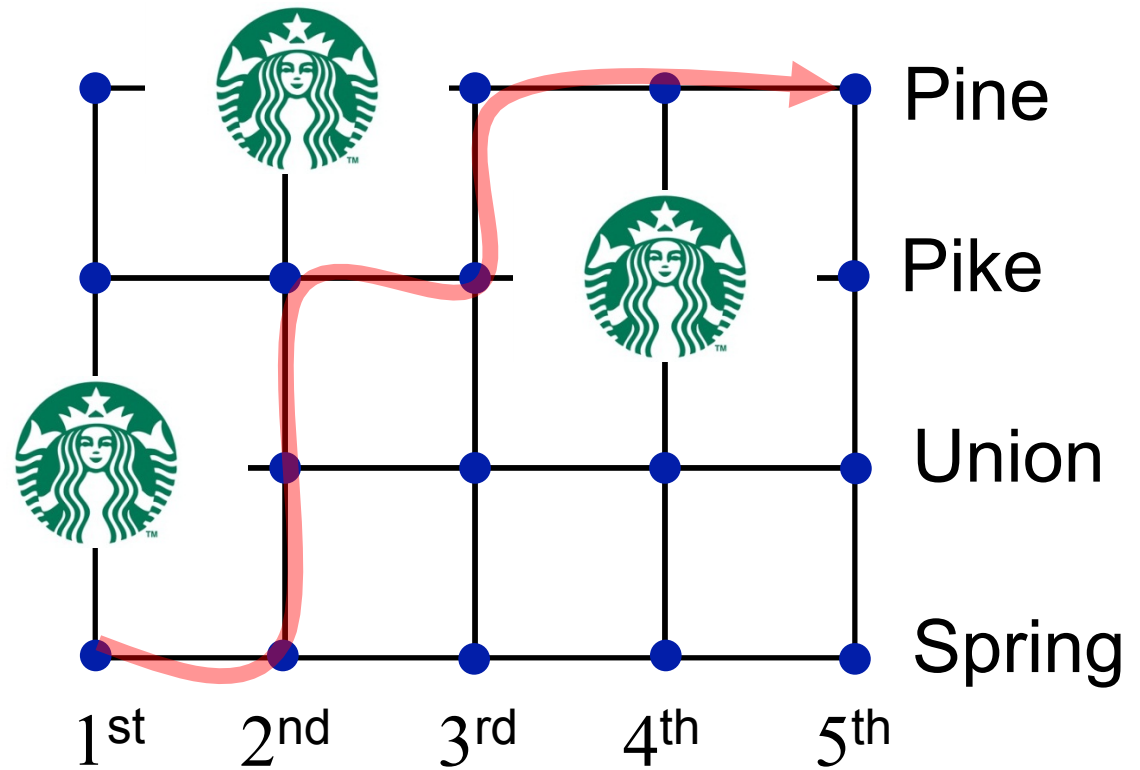
pppst.com

counting is hard with only 10 fingers

How many ways to do **X**?

X = “Choose an integer between one and ten.”

X = “Walk from 1st and Spring to 5th and Pine.”

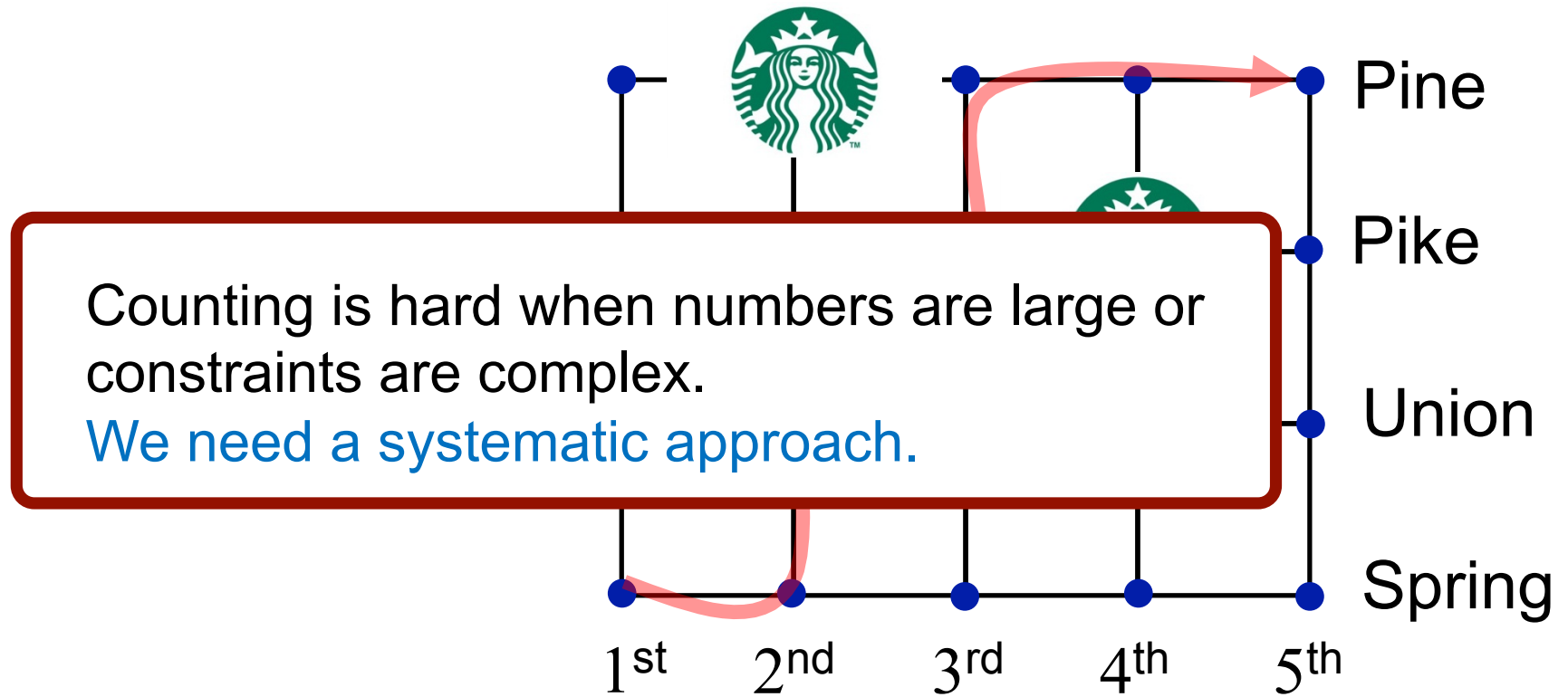


counting is hard with only 10 fingers

How many ways to do **X**?

X = “Choose an integer between one and ten.”

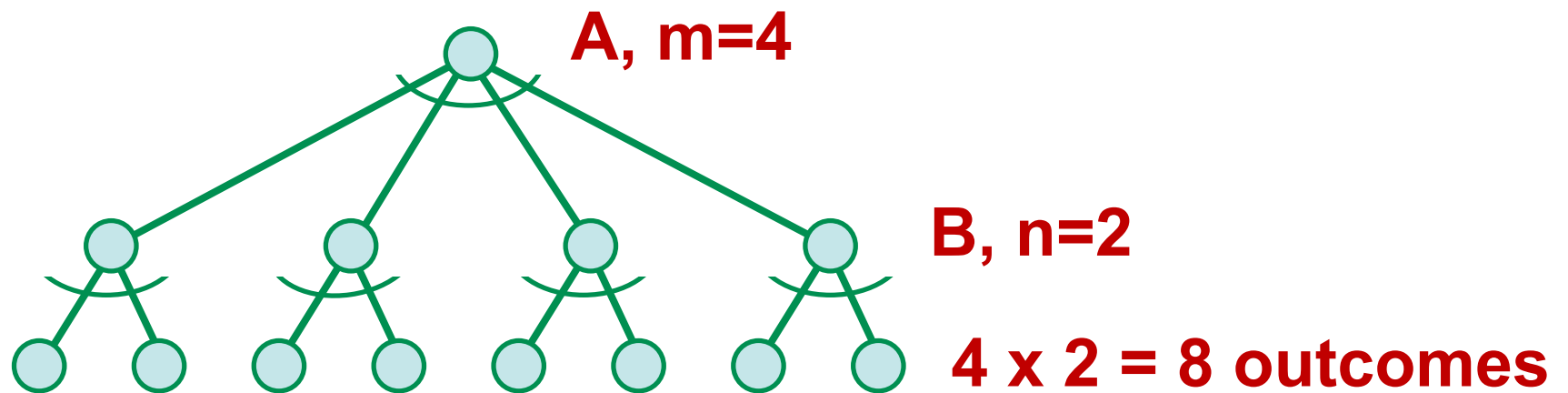
X = “Walk from 1st and Spring to 5th and Pine.”



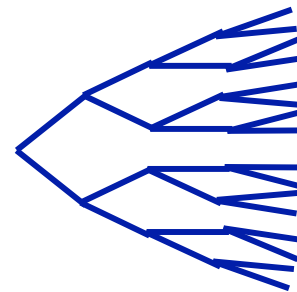
the basic principle of counting (product rule)

If one of **m** outcomes is chosen from **A**, followed sequentially by one of **n** outcomes from **B**, then there are...

m x n outcomes possible overall.



Generalizes to more events.



How many n-bit numbers are there?

$$2 \cdot 2 \cdot \dots \cdot 2 = 2^n$$

How many subsets of a set of size n are there?

$$\{1, 2, 3, \dots, n\}$$

Set contains 1 or doesn't contain 1.

Set contains 2 or doesn't contain 2.

Set contains 3 or doesn't contain 3...

$$2 \cdot 2 \cdot \dots \cdot 2 = 2^n$$

How many 4-character passwords are there if each character must be one of a, b, c, ..., z, 0, 1, 2, ..., 9 ?

$$36 \cdot 36 \cdot 36 \cdot 36 = 1,679,616 \approx 1.7 \text{ million}$$

Same question, but now characters cannot be repeated...

$$36 \cdot 35 \cdot 34 \cdot 33 = 1,413,720 \approx 1.4 \text{ million}$$

How many arrangements of the letters $\{a,b,c\}$ are possible
(using each once, no repeat, order matters)?

a b c	b a c	c a b
a c b	b c a	c b a

More generally, how many arrangements of n distinct items are possible?

$$n \cdot (n-1) \cdot (n-2) \cdot \dots \cdot 1 = n! \quad (n \text{ factorial})$$

Q. How many permutations of DOGIE are there?

$$5! = 120$$

Q. How many of DOGGY ?

$$5!/2! = 60$$

DOG₁G₂Y
DOG₂G₁Y

Q. How many of GODOGGY ?

$$\frac{7!}{3!2!1!1!} = 420$$

Your dark elf avatar can carry three objects chosen from:



How many ways can he/she be equipped?

$$\frac{5 \cdot 4 \cdot 3}{3!} = \frac{5!}{3! \cdot 2!} = 10$$

Combinations: Number of ways to choose r things from n things

$$\binom{n}{r} = \frac{n!}{r!(n-r)!}$$

Pronounced “n choose r” aka “binomial coefficients”

E.g., $\binom{n}{2} = \frac{n(n-1)}{2} = \Theta(n^2)$

Many identities:

$$\binom{n}{r} = \binom{n}{n-r} \quad \leftarrow \text{by symmetry of definition}$$

$$\binom{n}{r} = \binom{n-1}{r-1} + \binom{n-1}{r} \quad \leftarrow \text{1st object either in or out}$$

$$\binom{n}{r} = \frac{n}{r} \binom{n-1}{r-1} \quad \leftarrow \text{team + captain}$$

the binomial theorem

$$(x + y)^n = \sum_k \binom{n}{k} x^k y^{n-k}$$

Proof 1: Induction ...

Proof 2: Counting

$$(x+y) \cdot (x+y) \cdot (x+y) \cdot \dots \cdot (x+y)$$

Pick either x or y from first factor

Pick either x or y from second factor

...

Pick either x or y from nth factor

$$\binom{n}{k}$$

How many ways to get exactly k x's?

an identity with binomial coefficients

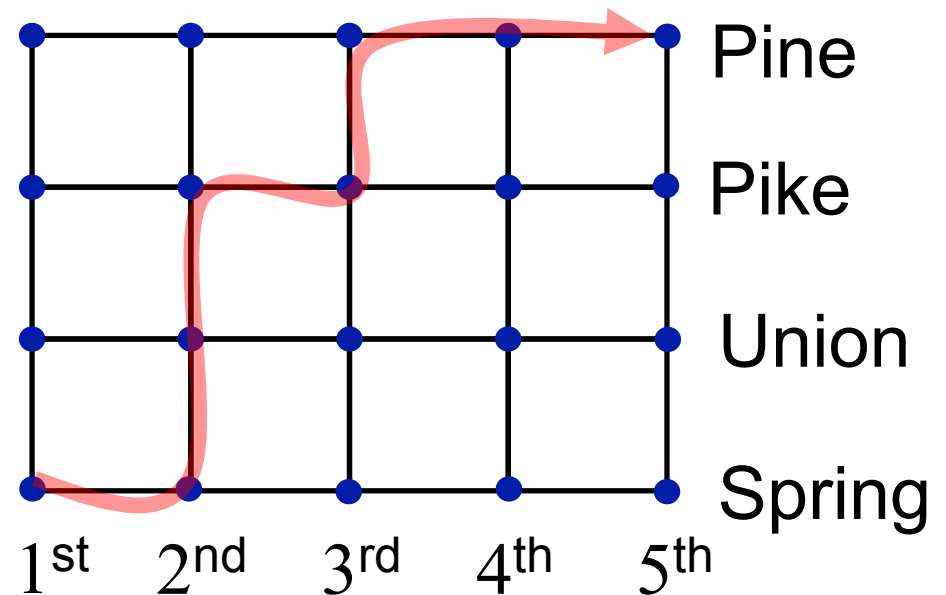
$$\sum_{k=0}^n \binom{n}{k} = 2^n$$

Proof:

$$\sum_{k=0}^n \binom{n}{k} = \sum_{k=0}^n \binom{n}{k} 1^k 1^{n-k} = (1 + 1)^n = 2^n$$

counting paths

How many ways to walk from 1st and Spring to 5th and Pine only going North and East?



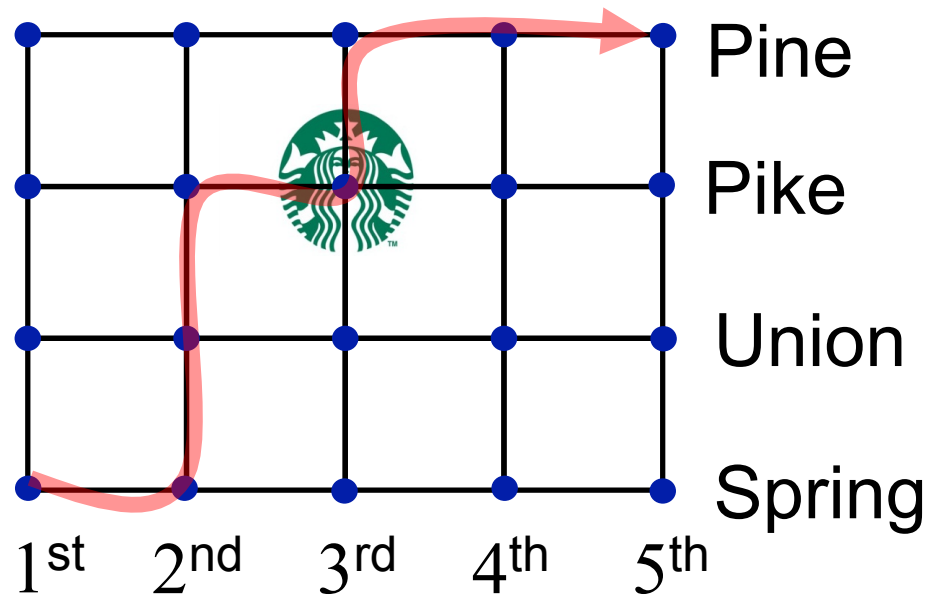
A: *Changing the visualization often helps.*

Instead of tracing paths on the grid above, list choices. You walk 7 blocks; at each intersection choose N or E; must choose N exactly 3 times.

$$\binom{7}{3} = 35$$

counting paths

How many ways to walk from 1st and Spring to 5th and Pine only going North and East, if I want to stop at Starbucks on the way?



Other problems

10 people of different heights. How many ways to line up 5 of them?

Line up 5 of them in height order?

of ways to rearrange letters in word SYSTEMS

Other problems

of 7 digit numbers (decimal) with at least one repeating digit?
(allowed to have leading zeros).